

GRADE 4

Lesson Activity Masters

Six Weeks 1

Lesson 1

Teacher Notes: Problem-Solving 1

(Make copies of this page on colored cardstock, laminate, and cut apart along the dashed line - this page makes 3 sets - each pair of students needs 1 set.)

4

7

1

6

2

5

0

8

3

4

7

1

6

2

5

0

8

3

4

7

1

6

2

5

0

8

3

Teacher Notes: Problem-Solving 2

(Make copies of this page on colored cardstock, laminate, and cut apart along the dashed line - this page makes 3 sets - each pair of students needs 1 set.)

4 7 1 6

. 5 0 8 3

4 7 1 6

. 5 0 8 3

4 7 1 6

. 5 0 8 3

Decimal Place-Value Mod

Ones	Tenths

el Mat

Hundredths

A large, empty rectangular box with a solid black border, intended for writing or drawing. It occupies the majority of the page below the title and the 'Hundredths' label.

DECIMAL CARDS

1.74

3.46

4.07

5.29

0.69

0.09

0.8

0.7

(Copy on back of decimal cards)



MATHEMATICS



MATHEMATICS



MATHEMATICS



MATHEMATICS



MATHEMATICS



MATHEMATICS



MATHEMATICS



MATHEMATICS



Decimal Digits Record

Number on Card _____	Value of Each Place		
Sketch of Model	Ones	Tenths	Hundredths
	Number in Words		

Number on Card _____	Value of Each Place		
Sketch of Model	Ones	Tenths	Hundredths
	Number in Words		

Number on Card _____	Value of Each Place		
Sketch of Model	Ones	Tenths	Hundredths
	Number in Words		

Number on Card _____	Value of Each Place		
Sketch of Model	Ones	Tenths	Hundredths
	Number in Words		

Decimal Expanded Form Strips

(Copy 1 page on colored paper for each student - students will cut strips along dark lines to make 4 separate strips)

The image shows a worksheet with four vertical columns. Each column contains eight rectangular boxes. Each box is divided into four horizontal sections by dashed lines, intended for writing decimal expanded form.

PLACE-VALUE GAME BOARD

ROUND 1

_____ / _____

ROUND 2

_____ . _____

ROUND 3

_____ . _____

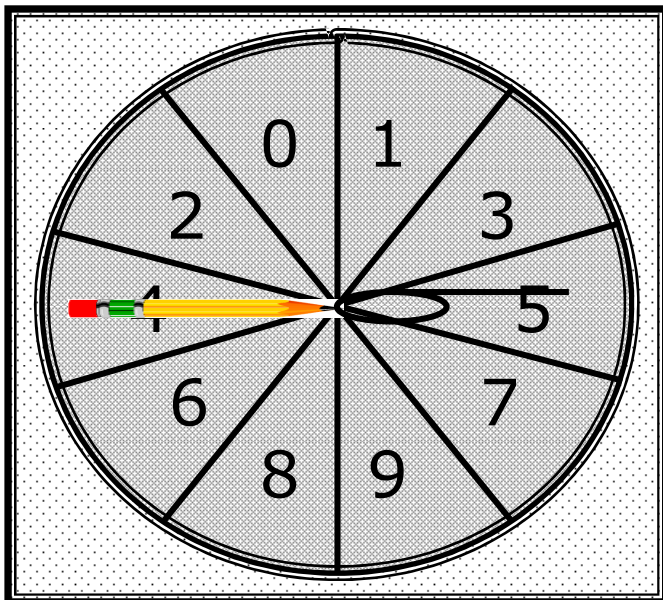
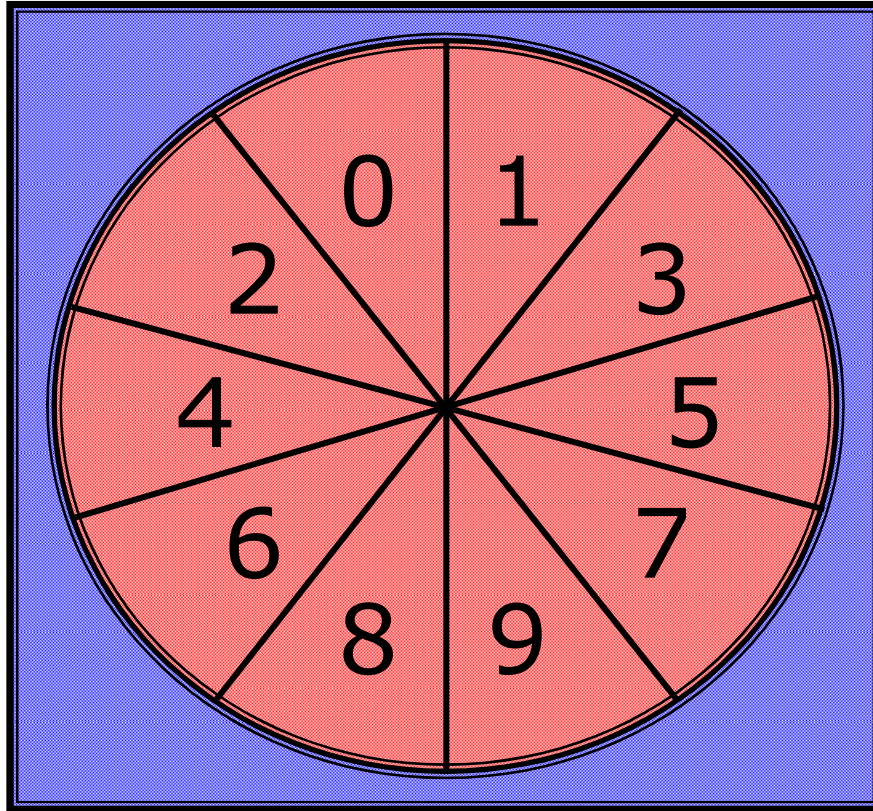
ROUND 4

_____ / _____

ROUND 5

_____ . _____

PLACE-VALUE GAME SPINNER



Shape a paper clip to form the pointer.



Place the point of a pencil in the center of the pointer and in the center of the spinner.

Spin the paper clip around the pencil point.

Lesson 6

RELATIONSHIP CARDS - 1

(Copy on cardstock, copy *TEKSING TOWARD STAAR* logo on back, then cut apart along the dashed lines. Copy the problem situation cards on one color and the expression/equation cards on a different color.)

Rene is 3 years younger than Cindy. Cindy is 11 years old. How old is Rene?

Six students get off the school bus. How many students are left on the bus?

Let s represent the number of students on the bus before the six students got off

Chris is 5 inches taller than Sean. Sean is 44 inches tall. How tall is Chris?

Roberta is 6 years older than Dana. Dana is 10 years old. How old is Roberta?

Wendy paid \$14 for a tape and a CD. The CD cost \$9. How much did the tape cost?

Let c represent the cost of the tape

Lauren had a full bag of 24 marbles until she lost 7 marbles. How many marbles does Lauren have now?

There are 4 more girls than boys in the class. How many girls are in the class?

Let b represent the number of boys

Maria is two years younger than Bill. How old is Maria?

Let b represent Bill's age

Sandy is 4 years older than Max. Sandy is 9 years old. How old is Max?

Let m represent Max's age

Samantha is 2 inches shorter than Ben. Samantha is 48 inches tall. What is Ben's height?

RELATIONSHIP CARDS - 2

(Copy on cardstock, copy *TEKSING TOWARD STAAR* logo on back, then cut apart along the dashed lines. Copy the problem situation cards on one color and the expression/equation cards on a different color.)

Together a notebook and a pen cost \$6. The pen cost \$2. What is the cost of the notebook?

24 people are seated on a bus. Five people stand up. How many people are seated now?

Number m is increased by 4. What is the number?

A number is 8 less than number g . What is the number?

Pete bought 1 dozen eggs, but 5 eggs were broken when he got home. How many eggs did he have left?

Twelve is subtracted from a number. The new number is 29. What is the original number?

Let n represent the original number

A number is added to 9. The sum of the numbers is 23. What number was added to 9?

Gina bought 36 cookies. She took 28 cookies to a party. How many cookies does she have left?

Let n represent the number added to 9

Nigel had 12 tennis balls. He bought 9 more tennis balls. How many tennis balls does he have now?

Jana has one full bag of marbles and 6 extra marbles. How many marbles does Jana have?

Let f represent a full bag of marbles

RELATIONSHIP CARDS - 3

(Copy on cardstock, copy *TEKSING TOWARD STAAR* logo on back, then cut apart along the dashed lines. Copy the problem situation cards on one color and the expression/equation cards on a different color.)

$$11 - 3$$

$$44 + 5$$

$$24 - 7$$

$$10 + 6$$

$$b - 2$$

$$b + 4$$

$$s - 6$$

$$48 + 2$$

$$14 - 9 = c$$

$$f + 6$$

RELATIONSHIP CARDS - 4

(Copy on cardstock, copy *TEKSING TOWARD STAAR* logo on back, then cut apart along the dashed lines. Copy the problem situation cards on one color and the expression/equation cards on a different color.)

$$m = 9 - 4$$

$$m + 4$$

$$24 - 5$$

$$9 + n = 23$$

$$6 - 2$$

$$12 + 9$$

$$g - 8$$

$$12 - 5$$

$$n - 12 = 29$$

$$36 - 28$$

Copy logo on back of each page of the Relationship Cards.



TEKSING TOWARD STAAR




MATHEMATICS




TEKSING TOWARD STAAR



MATHEMATICS





TEKSING TOWARD STAAR



MATHEMATICS





TEKSING TOWARD STAAR



MATHEMATICS




TEKSING TOWARD STAAR



MATHEMATICS




TEKSING TOWARD STAAR



MATHEMATICS




TEKSING TOWARD STAAR



MATHEMATICS




TEKSING TOWARD STAAR



MATHEMATICS




TEKSING TOWARD STAAR



MATHEMATICS




TEKSING TOWARD STAAR



MATHEMATICS

